

## Maths Red Task - Negative Numbers - 14.07.21

Name \_\_\_\_\_

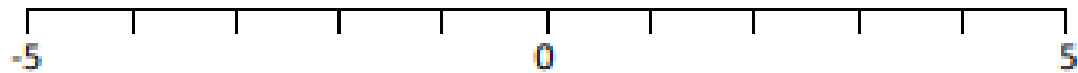
Date \_\_\_\_\_



### POSITIONING NEGATIVE NUMBERS -10 TO 10 SHEET 1

Write the numbers in the correct place on the number lines below.

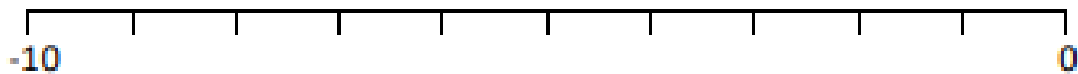
A) -2, -4, 3, -1, 2



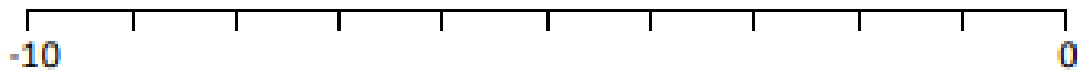
B) -3, 4, 2, -1, 1



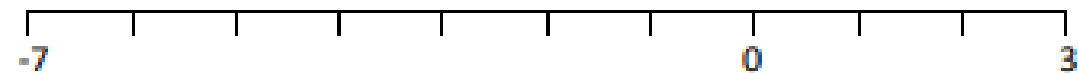
C) -7, -2, -4, -1, -3



D) -3, -8, -2, -5, -9



E) -5, -2, 2, -1, -6



Free Math Sheets, Math Games and Math Help

[MATH-SALAMANDERS.COM](http://MATH-SALAMANDERS.COM)

