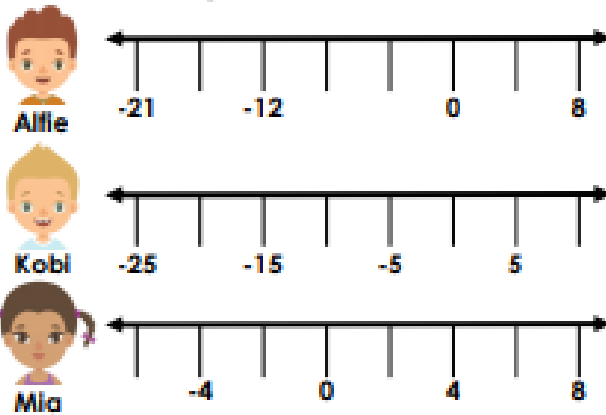


Maths Green Task - Negative Numbers - 14.07.21

7a. Three children are counting in sequences using number lines.

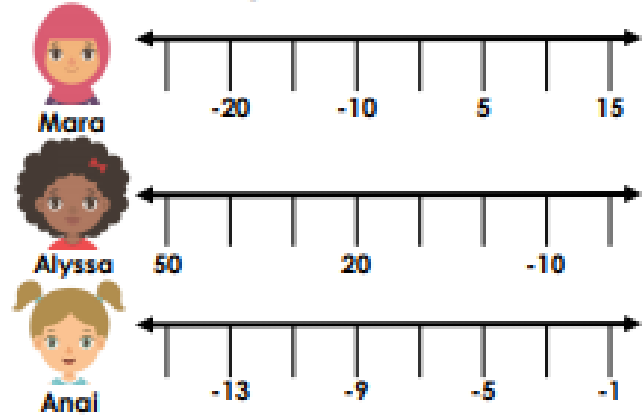


Are they correct? Explain how you know.



R

7b. Three children are counting in sequences using number lines.



Are they correct? Explain how you know.

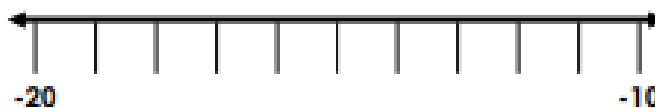


R

8a. What's my number?

My number is a negative number.
It is between -10 and -20.
It is an odd number.
It is a multiple of 5.

Use the number line to help you.

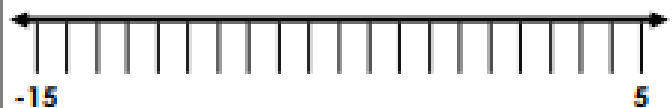


PS

8b. What's my number?

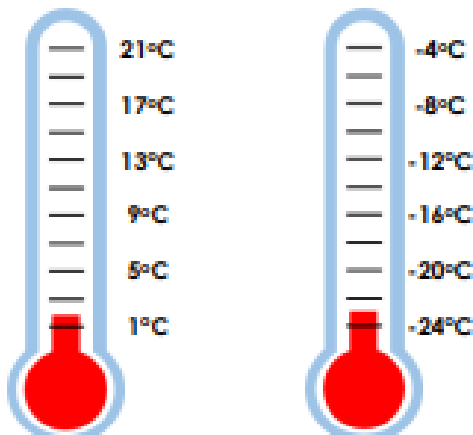
My number is between 5 and -15.
It is a negative number.
It is an even number.
It is 15 less than 5.

Use the number line to help you.



PS

9a. Which city is cooler? Explain how you know.



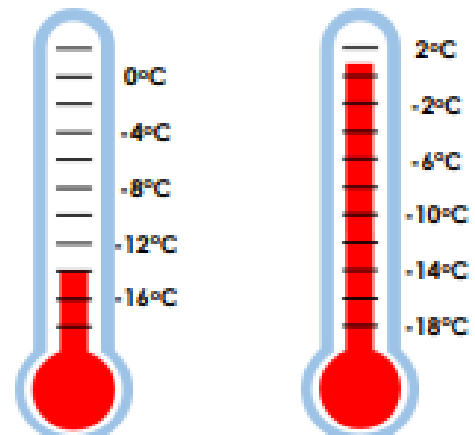
Munich

Fairbanks



P

9b. Which city is cooler? Explain how you know.



Banff

Bergen



P