

Monday - Maths

This half term we are recapping all of things we have learnt in Class R, each day there will be a new activity.

Monday - Money

Coins

What Size Are They?



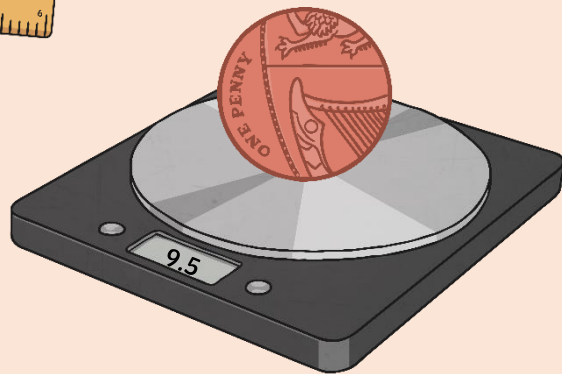

Let's measure and weigh!



**Diameter:
23mm**



**Thickness:
3.15mm**



Weight: 9.5g

Coins


What Size Are They?



Let's measure and weigh!



Diameter:
26mm

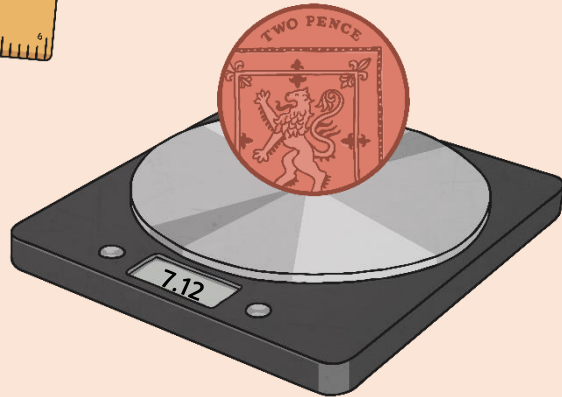


Thickness:

Bronze: 1.85mm

Copper-Plated Steel:

2.03mm



Weight: 7.12g

Coins

What Size Are They?



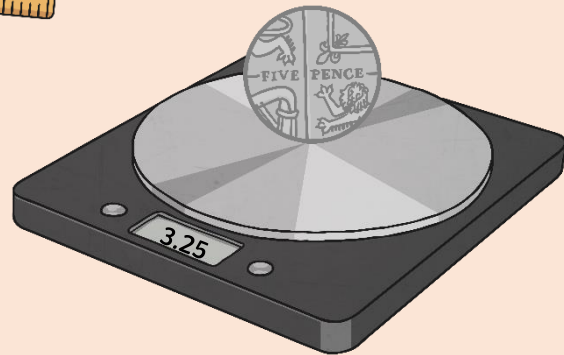

Let's measure and weigh!



**Diameter:
18mm**



Thickness: 1.7mm



Weight: 3.25g

Coins

What Size Are They?



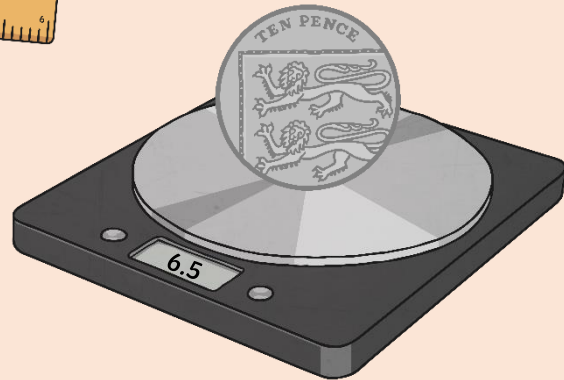

Let's measure and weigh!



**Diameter:
25mm**



Thickness: 1.85mm



Weight: 6.5g

Coins

What Size Are They?



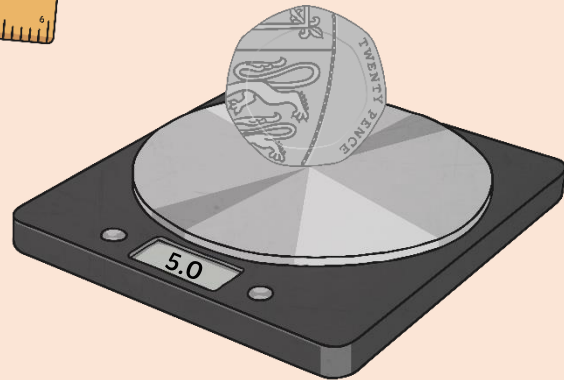

Let's measure and weigh!



Diameter: 21mm



Thickness: 1.7mm



Weight: 5.0g

Coins

What Size Are They?



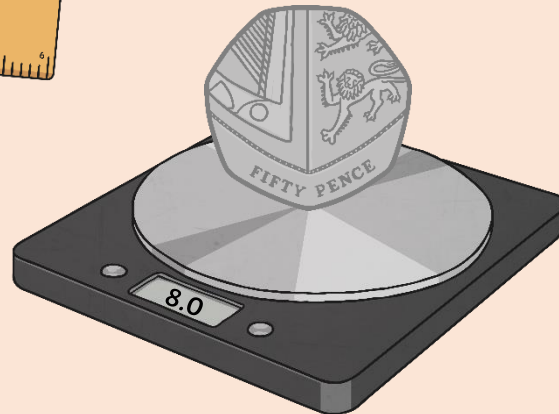

Let's measure and weigh!



**Diameter:
27mm**



Thickness: 1.8mm



Weight: 8.0g

Coins

What Size Are They?




Let's measure and weigh!



Diameter:
23.43mm



Thickness: 2.8mm




Weight: 8.75g

Coins

What Size Are They?



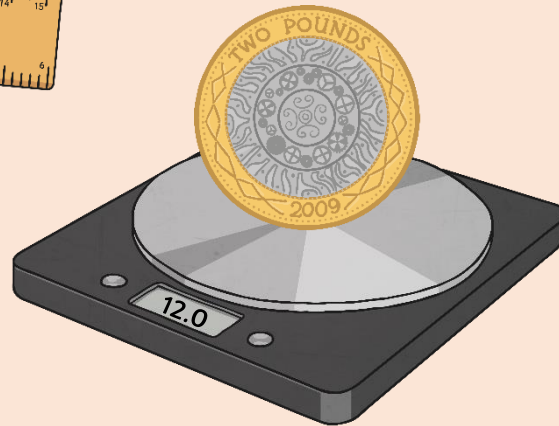

Let's measure and weigh!



**Diameter:
28mm**



Thickness: 2.5mm



Weight: 12.0g

British Coins Word Mat



1p
One Penny



2p
Two Pence



5p
Five Pence



10p
Ten Pence



20p
Twenty Pence





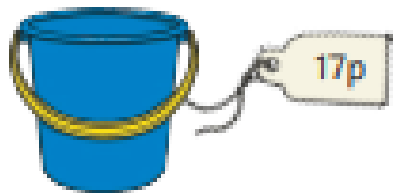

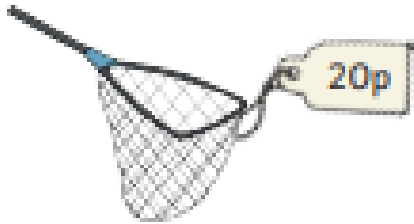
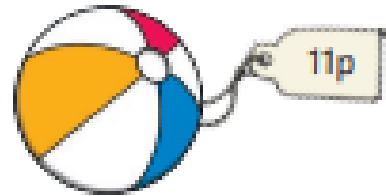
50p
Fifty Pence



£1
One Pound




£2
Two Pounds



Look at the price of the different items in the shop. Can you match each item to the purse with the correct number of pennies?


One purse is empty! Can you draw the correct number of pennies to buy the item that is left?




The children are paying for their ice creams at the ice cream cart. An ice cream costs 3p. Can you help them to add more pennies for their toppings and work out the total price?



--



--



--




--

How Much Do the Ice Creams Cost?

How much does each ice cream cost? Look at the coins and write the total amount in the circle.



How much does each ice cream cost? Look at the coins and write the total amount in the circle.



How much does each ice cream cost? Look at the coins and write the total amount in the circle.

