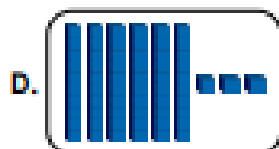

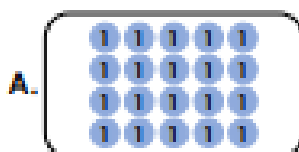


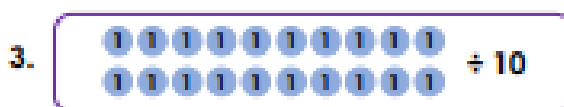

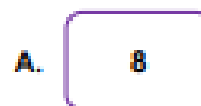
Divide by 10

1. Circle the numbers that can be divided equally by 10.




VC
HMH/Ed

2. Match the calculation to the correct answer.



VC
HMH/Ed

3. Declan is getting ready for his birthday party. He has 40 marbles.



I want to put 10 marbles in each party bag. I can make 5 party bags.

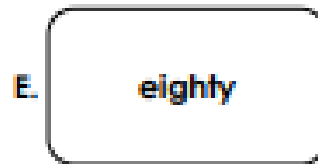


Is he correct? Explain your answer.



VC
HMH/Ed

Divide by 10

4. Circle the numbers that can be divided equally by 10.



VC
Hm/Gnd

5. Match the calculation to the correct answer.

1.

A.

2.

B.


3.

C.



VC
Hm/Gnd

6. Laurel is getting ready for her birthday party. She has sixty marbles.



I want to put ten marbles in each party bag. I have enough marbles to make 7 party bags.

Is she correct? Explain your answer.



8PS
Hm/Gnd