

Maths

Year 4

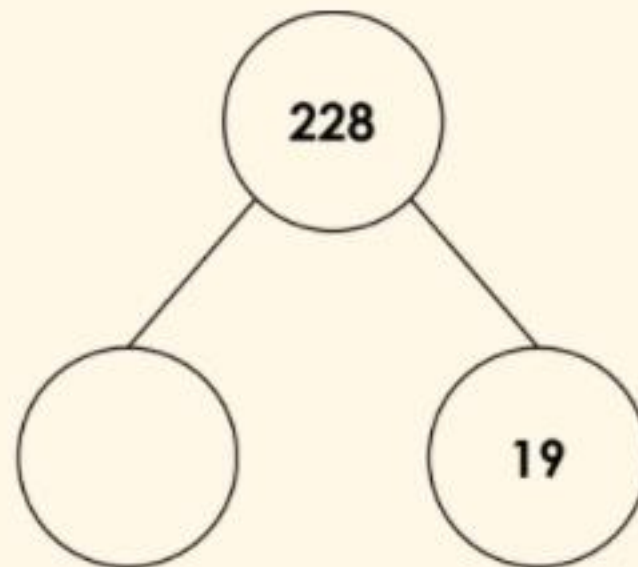
Subtraction

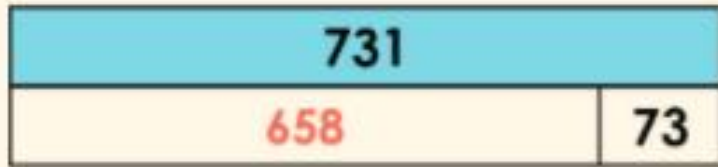
- Lesson Objective: To be able to use written subtraction to subtract pairs of numbers.

Find the missing values in both of these representations and record the number of exchanges both calculations involve.

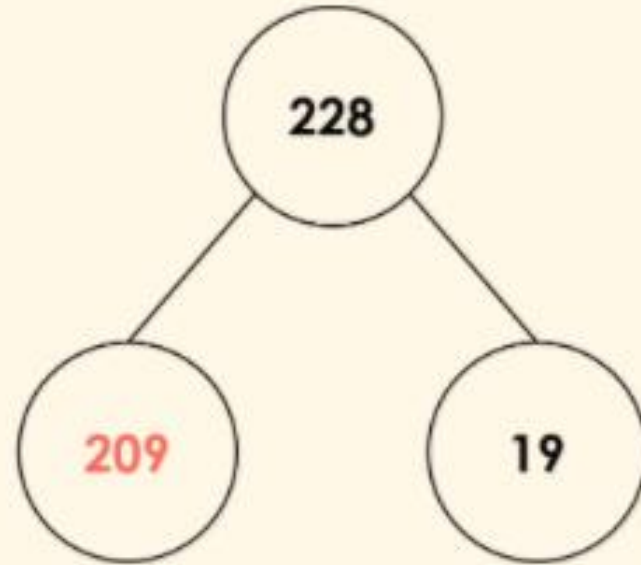


731	
	73





Involves 2 exchanges

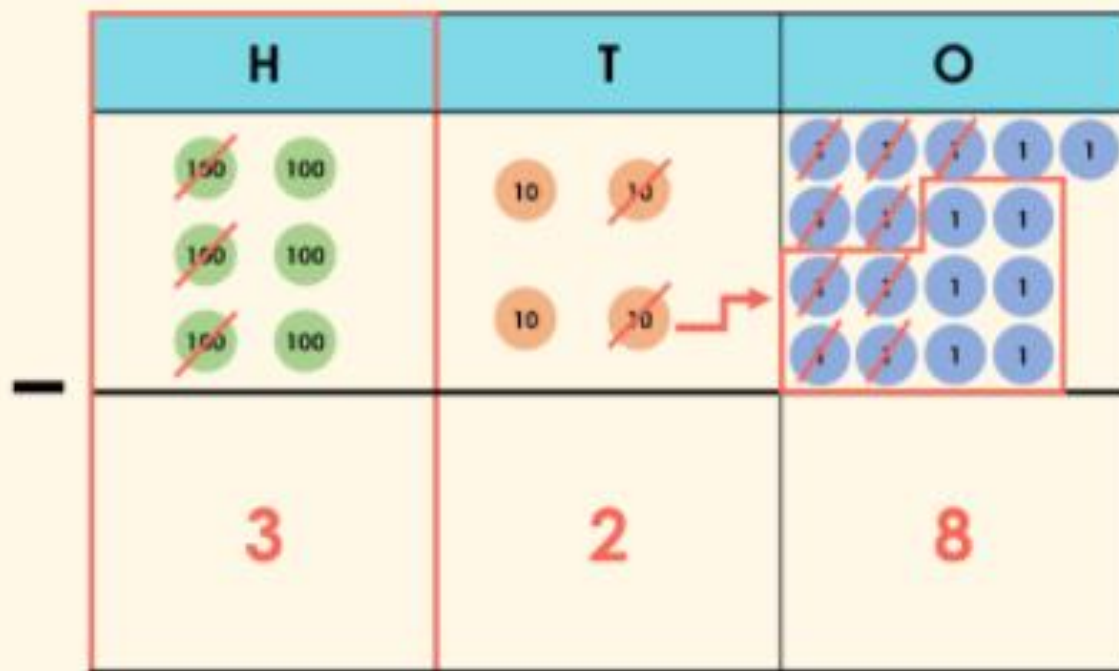


Involves 1 exchange

There are 6 hundreds counters and we need to subtract 3 hundreds from this because 319 has 3 hundreds.



6 hundreds - 3 hundreds = 3 hundreds


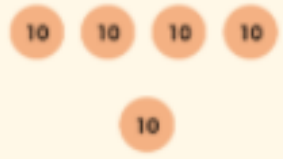
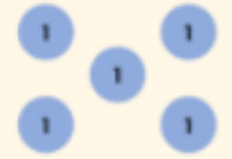


subtract 319

$647 - 319 = 328$

Complete the statement below using digits only.



H	T	O
		
<hr/>		

subtract 383

383 less than 455 equals .

Check



2 tens is less than 9 tens so a second exchange needs to take place. This will happen in the hundreds column.

$$12 \text{ tens} - 9 \text{ tens} = 3 \text{ tens}$$

$$4 \text{ hundreds} - 2 \text{ hundreds} = 2 \text{ hundreds}$$

$$537 - 298 = 239$$

	4	12	1
	5	3	7
-	2	9	8
	2	3	9



# Task

- Red Task - I can use the pictures to subtract single digit and two-digit numbers.
- Yellow Task - I can subtract a 3-digit number from a 3-digit number in different contexts.
- Green Task - I can solve 3-digit subtraction questions by providing reasoning.