

Monday 6th July

Dear Year 3,

I hope you are all doing well and are finding things to make you smile. It has been lovely seeing some of you at school this week and hearing what you have been getting up to. I am staying nice and busy with work, walking and cooking but think about you all daily.

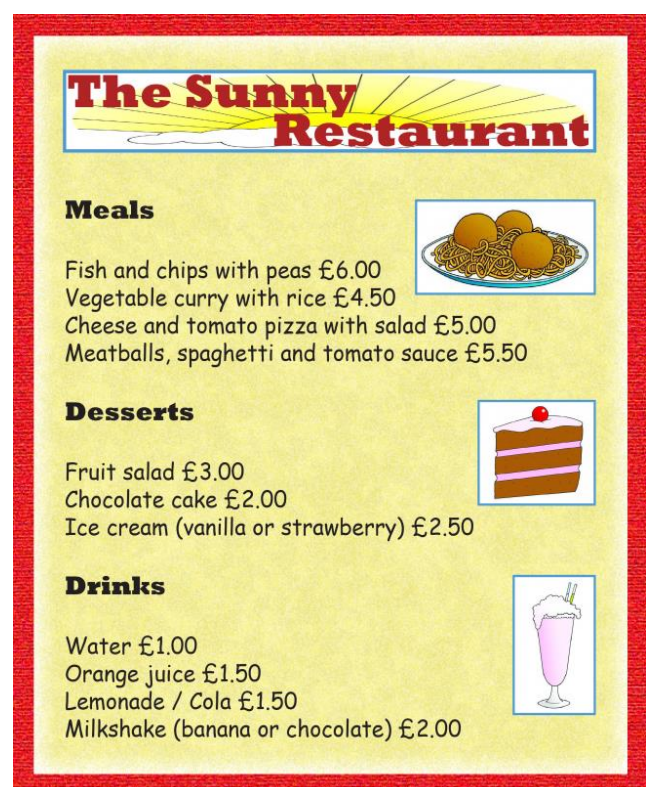
Topic

The Japanese have developed a cuisine of regional and traditional foods with boundless variety of aromatic and seasonal dishes. Your task this week is to research Japanese food and to create your own Japanese themed menu.

You will need to think of how to lay out and decorate your menu and which traditional Japanese dishes you would like to feature on it.

Try to include at least one starter, main and dessert on your menu.

Once finished, you could even have a go at making some of them. Make sure to take photos so I can see all the yummy things you make.



Monday 6th July

English

The picture below is an artist's interpretation of the story 'Sadako and the Thousand Paper Cranes'.

Use your five senses to write a descriptive piece of writing based on the picture.

What might you be able to smell? How could you describe what you can see? What noises might there be? What does the air taste like? What does it feel like to be stood there?

Try to use descriptive features such as adjectives, adverbs, expanded noun phrases and similes in your piece of writing.



Maths

Have a go at this week's maths challenge grid.

You can use sharing to solve division problems. When you are dividing (\div), you need to share the overall amount with the given number.

So $16 \div 4$ would see me sharing 16 things between 4, leaving me with an answer of 4.

Place Value

What are the next three numbers in this sequence?

4 8 12




○ ○ ○

○ ○ ○

[Reveal answer](#)


Problem Solving


How many buckets and spades did Henry find in the sandpit?


[Reveal answer](#)


+ and -

$6 + 7 + 8 =$  [Reveal answer](#)

$523 - 200 =$  [Reveal answer](#)

× and ÷

$11 \times 3 =$  [Reveal answer](#)

$21 \div 3 =$  [Reveal answer](#)


Reasoning

■	■	■	□	□	□
■	■	□	□	□	□

I need to colour in six more parts to make $\frac{3}{4}$.

Is Henry correct?

Explain why.



Design

Japan has a notorious earthquake history. About 1,500 earthquakes strike the island nation every year. Minor tremors occur on a nearly daily basis.

I would like you to design and build a bridge that would be able to withstand an earthquake or a tsunami.

Have a look at bridges. How are they made? What are they used for?

Select appropriate materials to make your bridge strong. Be inventive!

Monday 6th July



I hope you all have another great week and remember to send pictures of you working to @Eastayton_sch so I can see what you are all getting up to.

Stay safe and keep on smiling!

Kindest regards,

Miss Blakeley.

Monday 6th July



Five vertical lines for handwriting practice.



Eleven vertical lines for handwriting practice.