

Monday 29nd June


Dear Year 3,

Another week has passed and I can't believe that we are heading into July! The sun has been shining and Miss Blakeley has enjoyed some lovely long walks. I have also enjoyed doing some cooking and baking.




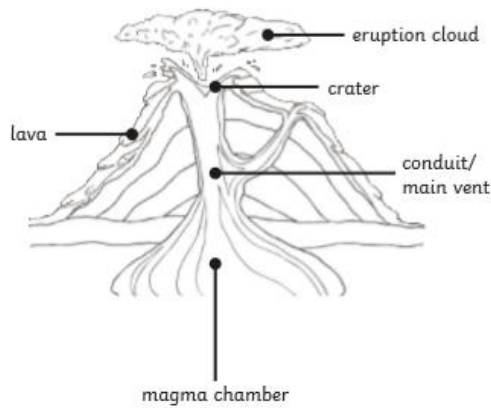
Listed below are some suggestions for activities that you can complete at home this week.

**Topic**

Here is a volcano, like one you might find in Japan!

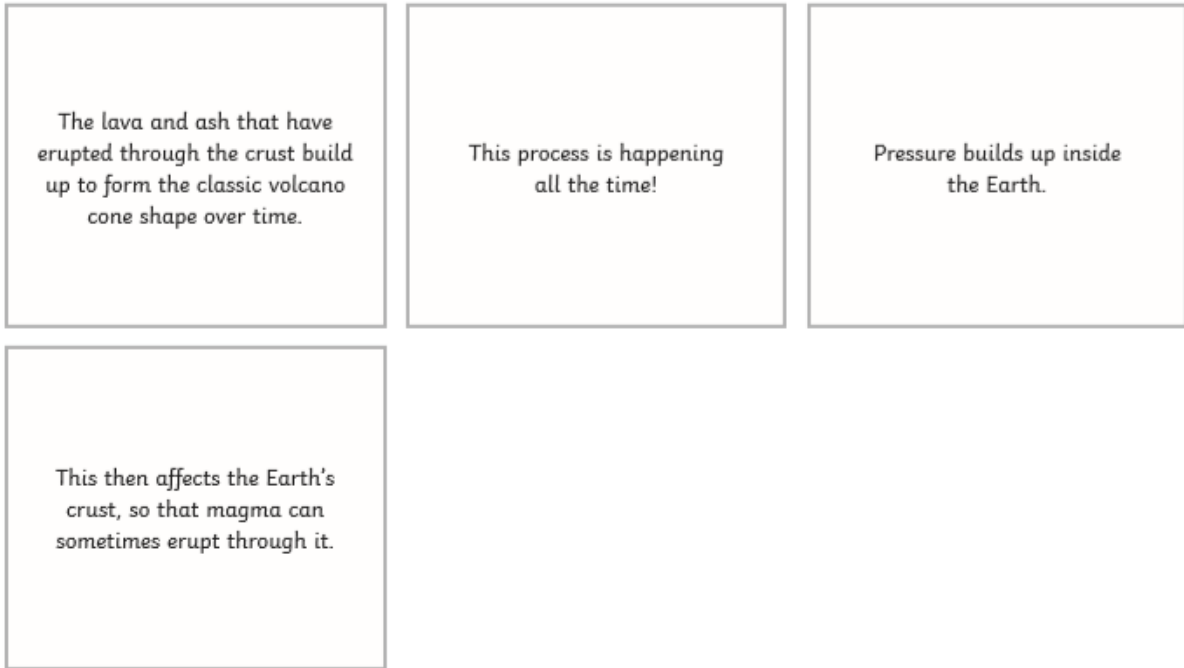


Cut and stick the different stages of a volcano's life.



You need to conduct some research on how a volcano is formed. You can either write your own step-by-step stages of how a volcano is formed or use the labels below to help you.

Monday 29nd June



### English

If you have internet access, watch this video <https://www.literacyshed.com/usain.html>, Usain Bolt - The Boy Who could fly. Watch the discussion between Usain and his mother then recreate this conversation punctuating it correctly.

Remember, when you are writing, **inverted commas** go before and after direct speech, surrounding what was said.

"I'm hungry," she complained.

If another character replies, use another set of inverted commas.

"What's for tea?" she asked. "Delicious ants!" her mum replied.

Punctuation, such as question marks, full stops and exclamation marks go inside the speech marks.

If you do not have internet access, write a conversation between two athletes or sports people.

What might they say each other? What sport are they talking about? Are they talking about a sporting event? Are they happy or sad? Have they just lost/won?

Monday 29nd June

## Maths

Here is this week's Maths challenge grid.

**Menu** **Week 1 Thursday**

**Place Value** Reveal answer  
Put these numbers in order from smallest to greatest:  
533 335 353 553 555  
○ ○ ○ ○ ○

**Problem Solving**  
How many parts of this shape need to be coloured in to show  $\frac{1}{3}$ ?  


Reveal answer

**+ and -**  
🍓 + 26 = 100 Reveal answer  
100 - 11 = 🍓 Reveal answer

**x and ÷**  
8 x 3 = 🍦 Reveal answer  
12 ÷ 4 = 🪑 Reveal answer

**Reasoning**  
  
These coins total £4 and 60 pence.  
Is Alison correct?  
Explain why.

## Music

Famous musicians often perform at the opening and closing ceremonies of the Games. Choose a selection of artists / bands that you would like to perform at the next event.

Write which artists you would like to perform and which songs you would like them to sing,

Can you create a singing and dancing performance using the songs of your choice to show people at home?

## Art/Design

Japan is famous for its origami! Origami is the Japanese art of folding paper into decorative shapes and figures. Can you follow some of these instructions to make your own origami?

Origami Rabbit


Monday 29nd June

## Origami Rabbit

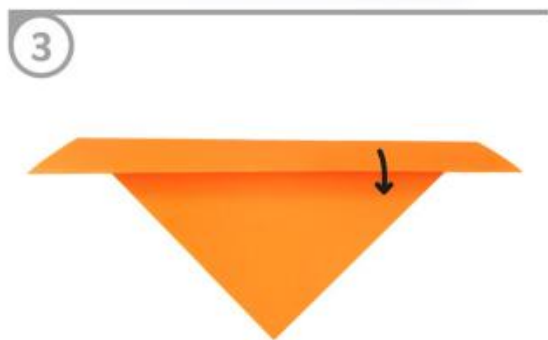
1



2




3



4




5



6



7



8




# Origami Butterfly



1



2



3



4



5



Flip over

6




7



8



Monday 29nd June



Have a go at finding and making your own origami!

I hope you all have another great week and remember to send pictures of you working to @Eastayton\_sch so I can see what you are all getting up to.

Stay safe and keep on smiling!

Kindest regards,

Miss Blakeley.